

SET- B

QUESTION BOOKLET NO:

028

UTKAL UNIVERSITY IMBA ENTRANCE TEST (UIET) – 2020
Utkal University, Vani Vihar, Bhubaneswar

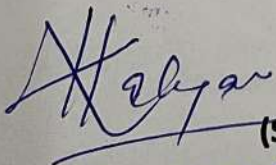
INSTRUCTIONS TO CANDIDATES

- Immediately after getting the Question Booklet read instructions carefully mentioned on the front and back page of the **Question Booklet**. Do not open the booklet unless asked by the Invigilator.
- The examination is of **One and Half Hours** duration.
- Write your **Roll Number, Answer Sheet Number and Date of the Test** at specified places given below and **put your signature**.
- This booklet consists of **four parts** and **70** questions in total. **1 (One)** mark is allotted for each correct answer.
- Put tick (**v**) on the category to which you belong to in the answer sheet.
- Use only **ball pen**. Do not use pencil or ink pen.
- Each question has four alternative answers (**A, B, C, D**). Indicate correct answer by putting the **correct capital alphabet** in the appropriate box in the Answer Sheet.
- To change the answer, cancel the first one clearly by putting a cross (**X**) and **enter the answer closet (top/bottom) to the question number**.
- There is **no Negative Marking**.

ROLL NUMBER _____

ANSWER SHEET NUMBER _____

DATE OF THE TEST _____



(Signature of the Candidate)

(Signature of the Invigilator)

21.08.2021

(Break the seal only when announcement is made)

Course Co-Ordinator

5-Year Integrated M.B.A. Programme
Utkal University, Vani Vihar

SECTION – I ENGLISH

1. Choose the correct Opposite Word: LIABILITY
 - A. Assumption
 - B. Exemption
 - C. Consumption
 - D. Presumption
2. Pick the most effective word to fill the blank. The ties that bind us together in common activity are sothat they can disappear at any moment
 - A. Excused
 - B. Forgave
 - C. Pardoned
 - D. None of these
3. Given below the four spelling of the same word. Choose the correct one.
 - A. Anonymism
 - B. Anonemous
 - C. Anonymous
 - D. Annonymous
4. Find out the odd Word Out.
 - A. Enmity
 - B. Animosity
 - C. Supportive
 - D. Controversy

Directions for Question Nos. 5-6: Following questions have the second sentence missing. Choose the MOST APPROPRIATE sentence from the given options to complete it.

5. A. The accident occurred in just a moment. B. _____. C. The cyclist from the main road did not notice it
 - A. The cyclist was thrown a few feet away.
 - B. The cyclist was blinded by a bullock cart moving slowly in the opposite direction
 - C. The result was a head-on-collision
 - D. A speeding car came from a side road
6. A. The cultural programme consisted of different tastes. B. _____. C. After the prayer, there was a dance item
 - A. It began with an invocation
 - B. Finally the National Anthem was sung
 - C. When the skit ended there was a group dance
 - D. The dance was followed by a skit
7. Convert the following Direct Sentence to Indirect Sentence. The judge said to the accused, "Hold your tongue".
 - A. The judge ordered the accused to hold his tongue.
 - B. The judge asked the accused to hold his tongue.
 - C. The judge told the accuse, hold your tongue.
 - D. The judge told the accused, hold his tongue.

Directions for Question Nos.8-9: For each of the following capitalized words, four words or phrases are given of which only one is synonymous with the given word. Select the synonym.

8. PROXIMITY
 - A. Nearness
 - B. Aloofness
 - C. Completely
 - D. Nearly

Course Co-Ordinator

5-Year Integrated M.B.A. Program
Utkal University, Vani Vihar

9. ABSTAIN

- A. Stay
- B. Tempt
- C. Refrain
- D. Pardon

Directions for Question 10 & 11: Below given are sentences with phrases. You are required to choose the best substitute for the given options.

10. I don't mind talking to him about the project but he is a person who thinks only of himself.
- A. Eccentric
 - B. Boaster
 - C. Egoist
 - D. Empathy
11. She makes it certain that she will never fight with her best friend over a pity thing like this.
- A. Assures
 - B. Insures
 - C. Ensures
 - D. Seizures

Directions for Question Nos. 12-13: Read the passage given below and answer the following questions:

A vexed problem facing us is the clamour to open more colleges and to reserve more seats for backward classes. But it will be a sheer folly to expand such facilities recklessly without giving any thought to the quality of education imparted. If admissions are made far more selective, it will automatically reduced the number of entrants. This should apply particularly colleges, many of which are little more than degree factories. Only then can the authorities hope to bring down the teacher-student ratio to manageable proportion. What is more, teachers should be given refresher courses, every summer to brush up their knowledge. Besides, if college managements increase their library budget it will help both the staff and to the new students a great deal. At the same time, however, it will be unfair to deny college education to thousands of young men and women, unless employers stop insisting on degrees even for clerical jobs. For a start, why can't the Government disqualify graduates from securing certain jobs, say class III and IV posts? Once the link between degrees and jobs is severed at least in some important departments, it will make young people think twice before joining college.

12. What can automatically help to reduce admission?
- A. Though entrance tests
 - B. Discouragement to open new colleges
 - C. Selective admissions
 - D. Selective admissions
13. Many of the new college are :
- A. Centres of advanced learning
 - B. Research institutions
 - C. Factories producing degree holders
 - D. Known for their academic excellence
14. Select the one which best expresses the same sentence Passive/Active Voice. They will demolish the entire block.
- A. The entire block is being demolished.
 - B. The block may be demolished entirely.
 - C. The entire block will have to be demolished by them.
 - D. The entire block will be demolished.

Course Co-Ordinator

5-Year Integrated M.B.A. Programme
Utkal University, Vanivihar

15. Choose the word which best expresses the meaning of the given word: **AMBITION**

- A. Plan
- B. Proclamation
- C. Desire
- D. Decision

Directions for Question Nos. 16 & 17: The following questions consist of two words each that have a certain relationship to each other, followed by four lettered pairs of words. Select the lettered pair that has the same relationship as the original pair of words.

16. Shield : Soldier

- A. Law : Court
- B. Stethoscope : Doctor
- C. Helmet : Rider
- D. Book : Rider

17. Chaff : Wheat

- A. Bone : Flesh
- B. Blood : Vein
- C. Dregs : Wine
- D. Rubbish : House

SECTION – II QUANTITATIVE APTITUDE

18. Find the odd one out

- A. 13
- B. 23
- C. 33
- D. 43

19. Complete the series 2, 5, 9, 19, 37,

- A. 76
- B. 74
- C. 75
- D. None of the above

20. A mother is twice as old as her son. If 20 years ago, the age of the mother was 10 times the age of the son, what is the present age of the mother?


- A. 38 years
- B. 40 years
- C. 43 years
- D. 45 years

21. A shopkeeper sold an article for Rs. 2500. If the cost price of the article is 2000, find the profit percent

- A. 23%
- B. 25%
- C. 27%
- D. 29%

22. If January 1, 1996, was Monday, what day of the week was January 1, 1997?

- A. Thursday
- B. Wednesday
- C. Friday
- D. Sunday


21.08.2024
Course Co-Ordinator
5. Year Integrated M.B.A. Program
Utkal University, Vani Vihar

23. What smallest number should be subtracted from 9805 so that it is divisible by 8?
- 3
 - 4
 - 5
 - 7
24. $(1024 - 263 - 233) \div (986 - 764 - 156) = ?$
- 9
 - 6
 - 7
 - 8
25. Three numbers are in the ratio of 3: 4:5 respectively. If the sum of the first and third numbers is more than the second number by 52, then which will be the largest number?
- 65
 - 52
 - 79
 - 63
26. The total strength of the class is 90 and the number of girls is twice that of boys. Suraj is ranked 14th from the top. Suppose there are 10 girls ahead of Suraj. Find the number of boys after Suraj in the ranking order.
- 24
 - 25
 - 26
 - 28
27. How many times the hands of a clock coincide in a day?
- 24
 - 22
 - 23
 - 21
28. Find the cube root of 5041.
- 65
 - 69
 - 71
 - 79
29. Find the decimal of an hour which is second
- 0.024
 - 0.00027
 - 0.020
 - 0.0002
30. A dishonest milkman sells milk at cost price, but he mixes water and earns $16\frac{2}{3}\%$ profit. Find the ratio of mixture and milk in the mixture.
- 7:5
 - 7:6
 - 7:7
 - 7:8
31. The product of two numbers is 120 and the sum of their squares is 289. The sum of the number is:
- 20
 - 23
 - 169
 - None of the above

32. Ajay spends 25% of his salary on house rent, 5% on food, 15% on travel, 10% on clothes and the remaining amount of Rs. 27,000 is saved. What is Ajay's income?
- Rs. 60,000
 - Rs. 80,500
 - Rs. 60,700
 - None of these
33. A water tank is 30 m long, 20 m wide and 12 m deep. It is made of iron sheet which is 3 m wide. The tank is open at the top. If the cost of iron sheet is Rs. 10 per meter, what is the total cost of iron sheet required to build the tank?
- Rs. 6000
 - Rs. 8000
 - Rs. 9000
 - Rs. 10,000
34. Find the missing term of the given expression: $18.834 + 818.34 - ? = 618.43$
- 217.644
 - 218.744
 - 217.744
 - 217.844
35. In the following number series, a wrong number is given. Find out that number 8, 18, 40, 86, 178, 370, 752.
- 18
 - 178
 - 370
 - 40

SECTION – III REASONING

36. Introducing a boy to her mother, Richa said that he is the son of the daughter of the father of her uncle. How is Richa related to the boy?
- Brother-in-law
 - Brother
 - Father
 - Uncle
37. Choose the correct code form. If BATMAN is coded as 123416, PERMAN is coded as 987416, then TAPER is coded as:
- 32987
 - 92897
 - 38972
 - 32978
38. Look at this series: 7, 10, 8, 11, 9, 12, ... What number should come next?
- 7
 - 12
 - 10
 - 13
39. How many pairs of letters are there in the word "CASTRAPHONE" which have as many letters between them in the word as in the alphabet?
- 3
 - 4
 - 5
 - 6

40. CMM, EOO, GQQ, _____, KUÜ

- A. GRR
- B. GSS
- C. ISS
- D. ITT

41. Blueberries cost more than strawberries.

Blueberries cost less than raspberries.

Raspberries cost more than strawberries and blueberries.

If the first two statements are true, the third statement is:

- A. TRUE
- B. FALSE
- C. UNCERTAIN
- D. CANN'T BE DEFINED

42. In a certain code 'MISSIONS' is written as 'MSIISNOS'. How is 'ONLINE' written in that code?

- A. OLNNIE
- B. ONILEN
- C. NOILEN
- D. LNOENI

43. One morning Udai and Vishal were talking to each other face to face at a crossing. If Vishal's shadow was exactly to the left of Udai, which direction was Udai facing?

- A. East
- B. West
- C. North
- D. South

44. Odometer is to mileage as compass is to:

- A. Speed
- B. Hiking
- C. Needle
- D. Direction

45. The marks obtained by 10 students in Science (out of 50) are 30, 41, 40, 41, 30, 41, 30, 28, 41, 40. The modal mark is:

- A. 40
- B. 30
- C. 41
- D. 35

46. Today is Monday. After 61 days, it will be:

- A. Tuesday
- B. Wednesday
- C. Thursday
- D. Saturday

47. Six members of a family are travelling. They are A, B, C, D, E and F. B is the son of C but C is not the mother of B. A and C are a married couple, E is the brother of C. D is the daughter of A. F is the brother of B. which of following is a pair of female?

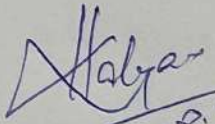
- A. AE
- B. BD
- C. DF
- D. AD

48. Which word does not belong with the group?

- A. Electric Crane
- B. Electric Train
- C. Electric Iron
- D. Electric Lift

Halys
21.08.2024

64. Which of the following is not non-cash expenditure for a company?
- A. Expenditure on advertising
 - B. Depreciation
 - C. Goodwill impairment
 - D. Amortisation
65. For the Olympics and World Tournaments, the dimensions of basketball court are :
- A. 26 m x 14 m
 - B. 28 m x 15 m
 - C. 27 m x 16 m
 - D. 28 m x 16 m
66. What is the name of Indira Gandhi's Sainadhi?
- A. Shanti Ghat
 - B. Shakti Sthal
 - C. Shanti Van
 - D. Shanti Sthal
67. Who is the winner of the US Open 2019 Men's title?
- A. Roger Federer
 - B. Rafael Nadal
 - C. Daniil Medvedev
 - D. Novak Djokovic
68. What is the new name of Feroz Shah Kotla ground?
- A. Arun Jaitley Stadium
 - B. Sheila Dikshit Stadium
 - C. Gautam Gambhir Stadium
 - D. Ajit Wadekar Stadium
69. Which country set a record for the world's highest single-day spike in corona virus cases by reporting 80,092 fresh COVID-19 cases on August 30, 2020 ?
- A. America
 - B. Italy
 - C. Brazil
 - D. India
70. Who got FIFA Best Player 2019 Award?
- A. Neymar
 - B. L. Messi
 - C. C. Ronaldo
 - D. Luka Modric


23.08.2024
Course Co-Ordinator
5-Year Integrated M.B.A. Programme
Utkal University, Vani Vihar

INSTRUCTIONS TO CANDIDATES

- Do not write anything anywhere in the Question Booklet and the Answer Sheet except making entries in the specified places, otherwise answer sheet will not be evaluated.
- Use last blank space of the question booklet for rough work. Do not use answer sheet for rough work.
- The Question Booklet and Answer Sheet will be supplied to you by the Invigilator. After the examination is over, you must hand over the **Answer Sheet** to the invigilator before leaving the examination hall. Any candidate who does not return the answer sheet will be disqualified and the University may take further action against him/her.
- Any candidate, found copying, receiving or giving assistance in the examination, will be disqualified.
- Mobile Phones and Electronic Devices are not allowed in the Examination Hall.
- You should follow the instructions given by the Centre Superintendent and by the Invigilator at the examination venue. If you violate the instructions, you will be disqualified.
- The University reserves the right to disqualify any candidate for any length of time, without assigning any reasons thereof.
- **PLEASE FOLLOW THE COVID-19 GUIDELINES ISSUED BY THE GOVERNMENT OF INDIA.**

Kalya
21-08-2024
Course Co-Ordinator
5-Year Integrated M.B.A. Programme
Utkal University, Vani Vihar